

EL OTOÑO




Vocabulario




Árbol con
hojas secas



Avellanas



Hoja seca



Bellota



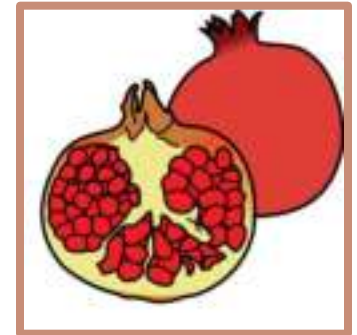
Castañas



Calabaza



Frutos secos



Granada


Vocabulario




Nuez



Setas



Pera



Mandarina



Manzana



Uvas



Paraguas



Frío

Vocabulario



Lluvia



Viento



Chaqueta



Chubasquero



Bufanda



Abriego



Botas



Calcetines

Vocabulario



Guantes



Jersey

Relaciona



Granada

Calabaza

Seta

Árbol

Uvas


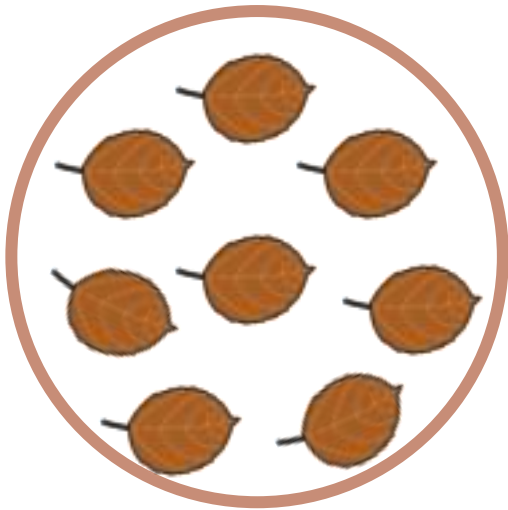
Castañas

Hoja

Colorea los dibujos del otoño



Cuenta



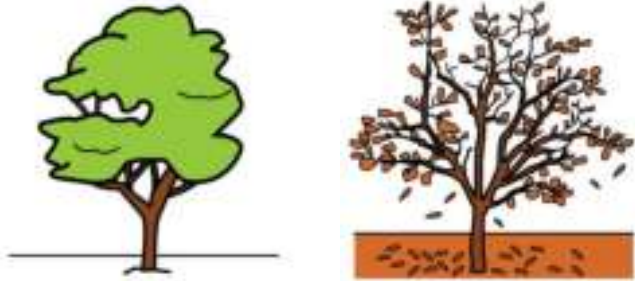
Cuenta




Elige la opción correcta



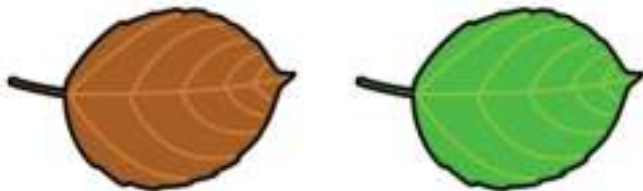
¿Cómo son los árboles en otoño?



¿Qué fruta comemos en otoño?



¿Cómo son las hojas en otoño?



¿Qué ropa utilizamos en otoño?



Elige la opción correcta



¿Qué zapatos nos ponemos en otoño?



¿Qué utilizamos en otoño?



Sumas






A mathematical equation for addition. The first box contains 7 red and green umbrellas. This is followed by a plus sign, then a second box containing 3 red and green umbrellas. This is followed by an equals sign and an empty rounded square box for the answer.

A mathematical equation for addition. The first box contains 8 green boots. This is followed by a plus sign, then a second box containing 3 green boots. This is followed by an equals sign and an empty rounded square box for the answer.

Sumas



 $+$  $=$ 

A visual addition problem. The first box contains four red hats with yellow brims, arranged in a 2x2 grid. This is followed by a plus sign, then a second box containing one red hat with a yellow brim. This is followed by an equals sign and a large empty rounded square box for the answer.

 $+$  $=$ 

A visual addition problem. The first box contains three yellow double-breasted coats, with two on top and one centered below. This is followed by a plus sign, then a second box containing three yellow double-breasted coats, with two on top and one centered below. This is followed by an equals sign and a large empty rounded square box for the answer.

Restas



A subtraction problem using pumpkins. The first box contains four pumpkins arranged in a 2x2 grid. A minus sign is placed between the first and second boxes. The second box contains one pumpkin. An equals sign follows, leading to an empty rounded square box for the answer.

$$4 - 1 = \square$$

A subtraction problem using socks. The first box contains six socks arranged in two groups of two. A minus sign is placed between the first and second boxes. The second box contains four socks arranged in two groups of two. An equals sign follows, leading to an empty rounded square box for the answer.

$$6 - 4 = \square$$

Restas



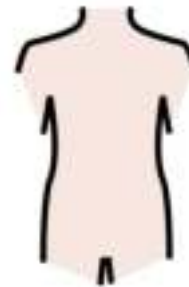
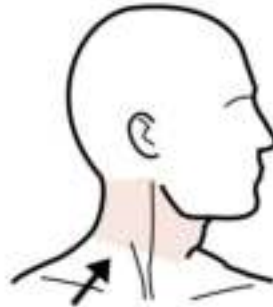
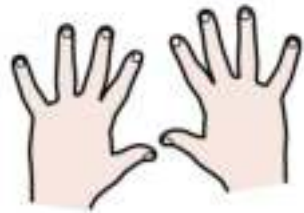
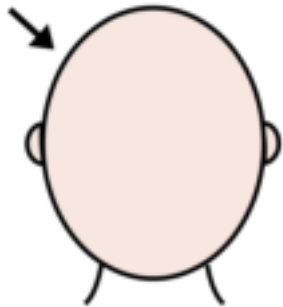
A subtraction problem using raincoats. The first box contains 7 yellow raincoats. A minus sign is followed by a second box containing 3 yellow raincoats. An equals sign is followed by an empty box for the answer.

$$7 - 3 = \square$$

A subtraction problem using leaves. The first box contains 4 brown leaves. A minus sign is followed by a second box containing 2 brown leaves. An equals sign is followed by an empty box for the answer.

$$4 - 2 = \square$$

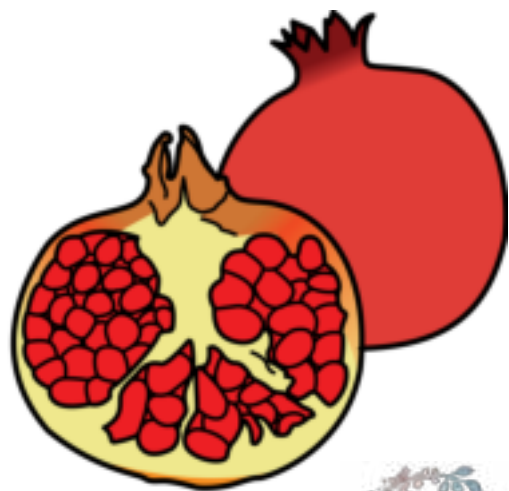
¿Dónde nos lo ponemos?

















Material elaborado por: Tamara Rojo Martín
miradaespecial.com



Los pictogramas utilizados para la creación de este material pertenecen a la web arasaac.org



Material bajo licencia Creative Commons. No se podrá copiar ni modificar y se compartirá online según y donde.
Queda permitida su impresión en papel.